

**Winter Vacation Homework (2019-2020)****Class II**

Subject	Homework
English Language	Do the given worksheet
English Literature	Notebook: Learn & Write beautifully the poems 'Santa Claus and the Reindeer' and 'Catching the Rain' Learn the Keywords of Block -17 & 19 and write three times each Block -14, 16
English	Do the given worksheet
English	Do the given worksheet
Maths	Do the given worksheet
Environmental Science	<b>Diagram:</b> Draw neatly and label the diagram 1. Water Cycle 2. Water Transport (any four)
Computer	Prepare for the Test. <b><u>(Revised Date January 9, 2020 (Thursday))</u></b>
General Knowledge	Solve the Mindbenders sheet

**Marks will be allotted to each Homework. These Marks will be added in the Final Examination.**

**All the Holiday Homeworks to be submitted by January 15, 2020**



# BHARTIYAM VIDYA NIKETAN (2019-2020)

## Winter Vacation Assignment

### Subject-Hindi Language

Name : \_\_\_\_\_ Class : II

#### iz1 viBr iB

, d ckj dh cr gA ckn'kkg vdcj chjcy ds l kfk egy ds vkl & ikl Vgy jgs FkA egy ds ikl  
 , d rkykc FkA rkykc ds fdukjs igpdj ckn'kkg : dA tkmS dk ekS e gkus ds dkj.k rkykc dk  
 i kuh cgr BMk FkA ckn'kkg us ml dk i kuh Nqk rks og cQZ l s Hkh T; knk BMk yxkA  
 ckn'kkg us chjcy l s i nk] ^D; k dkbZ bl i kuh ea ugk l drk gS\*\*  
 chjcy us dgk] ^egkjkt! ugkuk D; k] vki dN buke na rks vkneh jkr Hkj bl i kuh ea [kMk jg  
 l drk gA\*\*  
 ckn'kkg vdcj us dgk] ^chjcy , yku djok nks fd tks dkbZ bl rkykc ds i kuh ea jkr Hkj [kMk  
 jgsxk] ml s l kus dh l kS ekSja buke ea nh tk, xhA\*\*

#### 1d1/2 I gh 1/4/1/2 mUkj ij fu'ku yxlvkA

1/4 1/2 egy ds ikl , d ----- FkA

1/4 1/2 ?kj

1/4 1/2 dejk

1/4 1/2 rkykc

1/4 1/2 unh

1/2 1/2 ckn'kkg vdcj ----- ds l kfk egy ds vkl & ikl Vgy jgs FkA

1/4 1/2 njckjh

1/4 1/2 jkuh

1/4 1/2 l sud

1/4 1/2 chjcy

1/3 1/2 l kus dh ----- ekSja buke ea nh tk, xhA

1/4 1/2 nl

1/4 1/2 l kS

1/4 1/2 chl

1/4 1/2 nks

#### 1/4 1/2 foyke 'kn Nq/dj fy[k&

1/4 1/2 fnu & -----

1/4 1/2 xje & -----

#### 1/4 1/2 fn; s x; s izula ds mUkj fyf[k, &


1/4 1/2 ckn'kkg us chjcy l s D; k i nk\

m- -----

1/4 1/2 ds k ekS e Fk\

m- -----

i z2 fp= n[kdj i k o l D; fy[k&



1/d 1/2 -----

1/k 1/2 -----

1/kk 1/2 -----

1/kk 1/2 -----

1/M 1/2 -----

i z3 ^ejh ek ij 5 ykbuafy[k&

1/d 1/2 -----

1/k 1/2 -----

1/kk 1/2 -----

1/kk 1/2 -----

1/M 1/2 -----

**iz4 fn, x, 'kŋk dks l gh txg ij fyf[k,&**

¼ Rr} i qrd] >w} efD[k; kj] frryh] cdjh] vkj[k] ekyh] jksV; kj] ekyk½

, dopu

cgppu

-----

-----

-----

-----

-----

-----

-----

-----

-----

-----

**iz5 l oŋke 'kŋk ij xlyk culb,&**

¼d½ ; g ekj gŋ

¼[k½ bl ds i qk jax&fcjaks gŋ

¼x½ ep-s ekj cgr il n gŋ

¼k½ eŋs ekj dk ukp nŋkk gŋ

**iz6 viusvkl ikl nŋkdj crlb,&**

¼d½ vkl eku dŋ k gŋ

m- -----A

¼[k½ l M-d dk jax dŋ k gŋ

m- -----A


¼x½ vki ds ?kj ea fdrus dejs gŋ

m- -----A

¼k½ vki dh dŋkk ea fdrus cPps gŋ

m- -----A

i z7 fp= n[kdj muds ulps fØ; k fyf[k, A



[k.M & ^?k\*

i z8 'kñla ea fxurh fy[k&

½ d 11 & -----

¼ k 8 & -----

⅓ x 9 & -----

¼ k 4 & -----

⅓ M 19 & -----

i z9 n&nls i ; kž olph fy[k&

½ d jktk & -----] -----

¼ k ½ vk[k & -----] -----

⅓ x ½ i M+ & -----] -----

¼ k ½ ckný & -----] -----

i z10 foykë 'kñ fy[k&

½ d myVk & -----

¼ k ½ Åij & -----

⅓ x ½ de & -----

¼ k ½ xjhc & -----



BHARTIYAM VIDYA NIKETAN (2019-2020)

*Winter Vacation Assignment*

*Subject-General Knowledge (Mindbenders Sheet)*

---

Name : \_\_\_\_\_ Class : II

**Q.1 Find the full forms of:**

(a) N R I - \_\_\_\_\_

(b) P T O - \_\_\_\_\_

(c) V I P - \_\_\_\_\_

(d) A I R - \_\_\_\_\_

**Q.2 You must know:**

(a) \_\_\_\_\_ is the largest state of India.

(b) \_\_\_\_\_ is the smallest state of India.

**Q.3 Write the name of two international cities or countries with the following letters.**

(a) I - \_\_\_\_\_

(b) P - \_\_\_\_\_

(c) A - \_\_\_\_\_

(d) M - \_\_\_\_\_



Name : \_\_\_\_\_ Class : II

**Q.1 Read the passage & answer the questions that follow:**

The Chase

One day a rabbit was being chased by a fox. The rabbit was scared, but he was also smart. “There is more food in this hole”, The rabbit told the fox. The fox was greedy and looked in the hole. The rabbit slipped out of the other end and pushed the fox into the hole and ran away quickly.

(a) Multiple choice questions:

- (i) The rabbit in this story is being chased by a  
(a) fox                      (b) dog                      (c) cat                      (d) lion
- (ii) Why was the rabbit scared?  
(a) The rabbit was lost                      (b) The rabbit saw a tiger  
(c) A fox was chasing it                      (d) The rabbit was in the hole

(b) Fill in the blanks:

- (i) The fox was \_\_\_\_\_.
- (ii) The rabbit pushed the \_\_\_\_\_ into the hole.

(c) Find & write the past form of

- (i) Chase \_\_\_\_\_                      (ii) push \_\_\_\_\_

(d) Write the antonyms of the following from the passage.

- (i) less \_\_\_\_\_                      (ii) start \_\_\_\_\_

(e) Write the synonyms of the following from the passage

- (i) finish \_\_\_\_\_

## Section B (Writing)

**Q.2 Write a paragraph on 'My School'.**

---

---

---

---

---

**Q.3 Write 5 lines on the given picture:**



**Ans.**

---

---

---

---

---



**Q.4 Fill in the blanks using “and” or “but”.**

(a) My uncle \_\_\_\_\_ I went to the market.

(b) We were going to Delhi \_\_\_\_\_ missed the train.

**Q.5 Write the past form of**

(a) hear \_\_\_\_\_

(b) feel \_\_\_\_\_

(c) bring \_\_\_\_\_

(d) get \_\_\_\_\_

**Q.6 Write two rhyming words for the following:**

(a) blow - \_\_\_\_\_

(b) heat - \_\_\_\_\_

**Q.7 Make words with**

(a) sm - \_\_\_\_\_

(b) sl - \_\_\_\_\_

(c) bl - \_\_\_\_\_

(b) st - \_\_\_\_\_

**Section D (Vocabulary)**

**Q.8 Write antonyms of the following:**

(a) most - \_\_\_\_\_

(b) day - \_\_\_\_\_

(c) tall - \_\_\_\_\_

(b) rich - \_\_\_\_\_

**Q.9 Write plurals of the following:**

(a) leaf - \_\_\_\_\_

(b) word - \_\_\_\_\_

(c) cup - \_\_\_\_\_

(b) glass - \_\_\_\_\_

**Q.10 Write synonyms of the following:**


(a) new - \_\_\_\_\_

(b) fast - \_\_\_\_\_

(c) begin - \_\_\_\_\_

(b) calm - \_\_\_\_\_

**Q.11 Draw & colour Christmas Tree.**





Name : \_\_\_\_\_ Class : II

**Q.1 Do as directed.**

(a)  $7 \times 5 =$  \_\_\_\_\_

(b)  $10 \times 0 =$  \_\_\_\_\_

(c)  $101 \times 1 =$  \_\_\_\_\_

(d)  $15 + 0 =$  \_\_\_\_\_

(e)  $23 - 1 =$  \_\_\_\_\_

(f)  $50 \div 5 =$  \_\_\_\_\_

(g)  $81 \div 9 =$  \_\_\_\_\_

(h)  $30 - 5 =$  \_\_\_\_\_

(i)  $28 \div 2 =$  \_\_\_\_\_

(j)  $17 + 5 =$  \_\_\_\_\_

**Q.2 Write the expanded form:**

(a) 3521- \_\_\_\_\_

(b) 5012 - \_\_\_\_\_

**Q.3 Draw a line with the help of ruler.**

(a) 6 cm

(b) 9 cm

**Q.4 Draw shapes with the help of ruler.**

(a) square of 4 cm

(b) rectangle of length = 5 cm, breadth = 3 cm

(c) triangle of 3 cm

Q.5 Word Problem

How much money will I get back if I buy a book for Rs. 19 & give the shopkeeper a Rs 20 note?

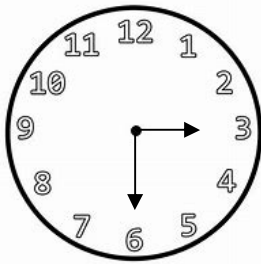
Ans. \_\_\_\_\_  
\_\_\_\_\_  
\_\_\_\_\_

Q.6 What is the total value?

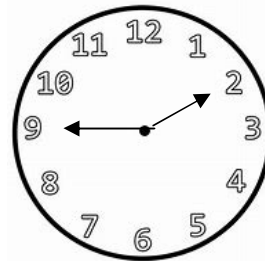
(a)  $\text{Rs } 10 + \text{Rs } 10 + \text{Rs. } 2 + \text{Rs. } 1 + \text{Rs. } 1 =$  \_\_\_\_\_

(b)  $\text{Rs. } 20 + \text{Rs. } 5 + \text{Rs. } 2 + \text{Rs. } 1 =$  \_\_\_\_\_

Q.7 Tell the time



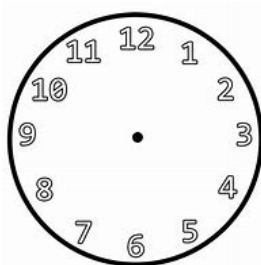
\_\_\_\_\_  
\_\_\_\_\_



\_\_\_\_\_  
\_\_\_\_\_

Q.8 Draw the hands of clock

(a) 2:20 pm



(b) 8:10 am

